













Nombre: \_\_\_\_\_


Fecha: \_\_\_\_\_

Dibuja la fracción en la cuadrícula y calcula.


Ejemplo

$\frac{3}{4}$	de	168	
42 42			
42 42			
168		4	42
08		42	x3
0			<u>126</u>

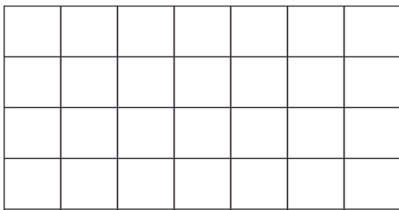
$$\frac{2}{7} \text{ de } 539$$



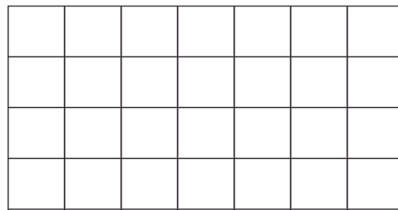
$$\frac{5}{7} \text{ de } 427$$



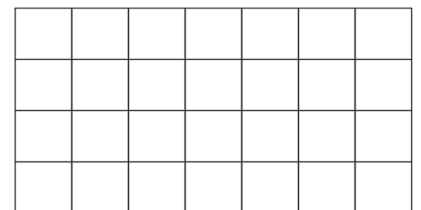
$$\frac{6}{8} \text{ de } 200$$



$$\frac{2}{3} \text{ de } 6$$



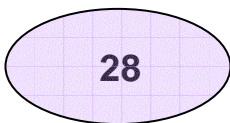
$$\frac{1}{7} \text{ de } 378$$



[www.fichas.es](http://www.fichas.es)

Une con flechas

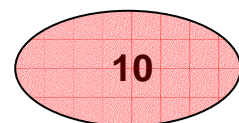
$$\frac{2}{2} \text{ de } 10$$



$$\frac{7}{8} \text{ de } 32$$



$$\frac{1}{2} \text{ de } 18$$











Nombre: \_\_\_\_\_


Fecha: \_\_\_\_\_

Dibuja la fracción en la cuadrícula y calcula.


Ejemplo

$\frac{3}{4}$	de	168	
42	42		
42	42		
168		4	42
08		42	x3
0			<u>126</u>

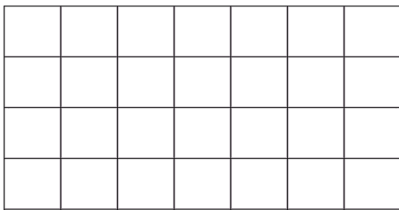
$$\frac{4}{6} \text{ de } 432$$



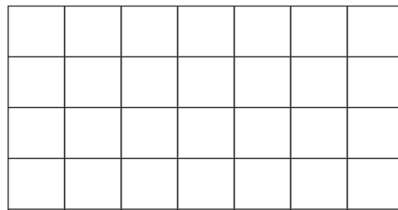
$$\frac{5}{7} \text{ de } 532$$



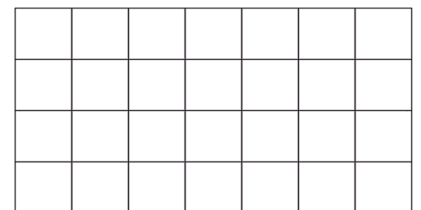
$$\frac{2}{4} \text{ de } 196$$



$$\frac{4}{5} \text{ de } 140$$



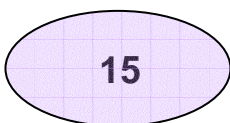
$$\frac{4}{4} \text{ de } 244$$



[www.fichas.es](http://www.fichas.es)

Une con flechas

$$\frac{5}{5} \text{ de } 15$$



$$\frac{2}{4} \text{ de } 44$$



$$\frac{1}{4} \text{ de } 28$$



Nombre: \_\_\_\_\_


Fecha: \_\_\_\_\_

Dibuja la fracción en la cuadrícula y calcula.


Ejemplo

$\frac{3}{4}$ de	168
42 42	
42 42	
168   4	42
08 42	x3
0	126

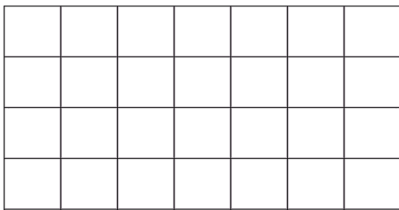
$$\frac{3}{9} \text{ de } 432$$



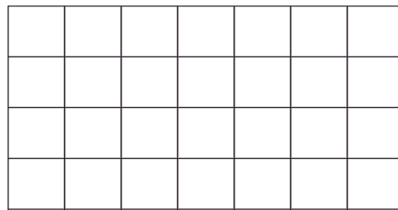
$$\frac{2}{7} \text{ de } 259$$



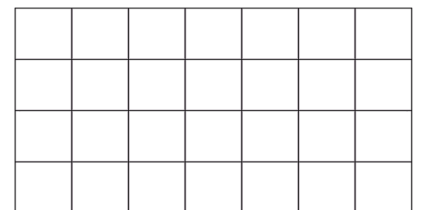
$$\frac{1}{5} \text{ de } 215$$



$$\frac{6}{8} \text{ de } 224$$



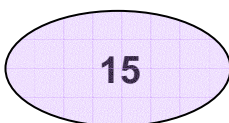
$$\frac{1}{3} \text{ de } 171$$



[www.fichas.es](http://www.fichas.es)

Une con flechas

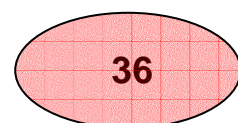
$$\frac{4}{5} \text{ de } 45$$



$$\frac{3}{5} \text{ de } 25$$



$$\frac{5}{6} \text{ de } 30$$



Nombre: \_\_\_\_\_

Fecha: \_\_\_\_\_

Dibuja la fracción en la cuadrícula y calcula.

Ejemplo

$\frac{3}{4}$ de	168
42 42	
42 42	
168   4	42
08 42	x3
0	<u>126</u>

$$\frac{3}{7} \text{ de } 7$$


$$\frac{2}{7} \text{ de } 273$$


$$\frac{2}{4} \text{ de } 264$$

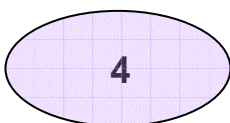

$$\frac{3}{3} \text{ de } 87$$


$$\frac{3}{6} \text{ de } 54$$


[www.fichas.es](http://www.fichas.es)

Une con flechas

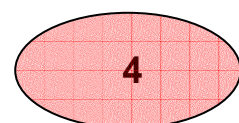
$$\frac{4}{8} \text{ de } 8$$



$$\frac{4}{6} \text{ de } 6$$



$$\frac{2}{5} \text{ de } 45$$



Nombre: \_\_\_\_\_

Fecha: \_\_\_\_\_

Dibuja la fracción en la cuadrícula y calcula.

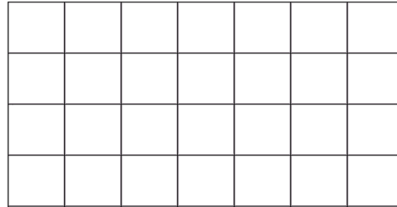
Ejemplo

$\frac{3}{4}$  de 168


42	42				
42	42				

168 | 4      42  
08 42      x3  
0              126

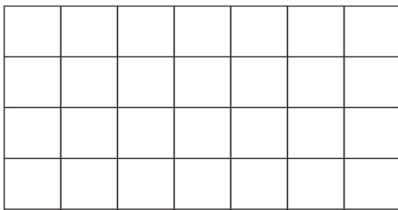
$\frac{2}{4}$  de 220



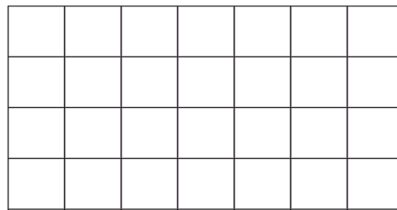
$\frac{5}{6}$  de 426



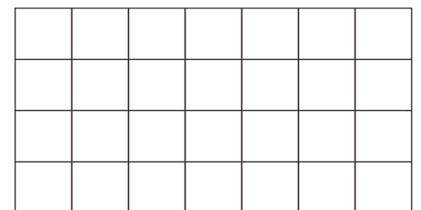
$\frac{3}{6}$  de 312



$\frac{2}{2}$  de 38



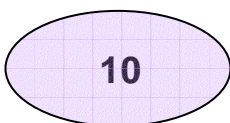
$\frac{2}{8}$  de 136



[www.fichas.es](http://www.fichas.es)

Une con flechas

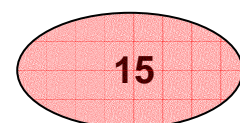
$\frac{5}{6}$  de 18



$\frac{5}{6}$  de 12



$\frac{3}{3}$  de 15



Nombre: \_\_\_\_\_

Fecha: \_\_\_\_\_

Dibuja la fracción en la cuadrícula y calcula.

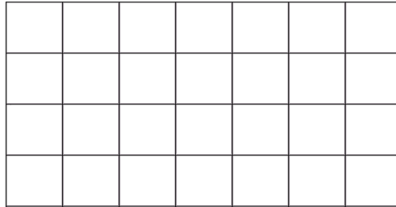
Ejemplo

$\frac{3}{4}$  de 168


42	42				
42	42				

168 | 4      42  
08 42      x3  
0              126

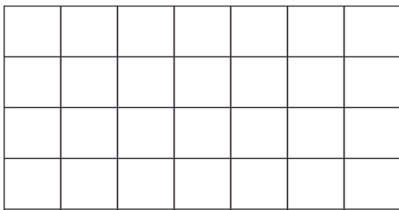
$\frac{3}{6}$  de 480



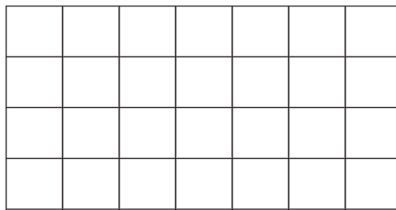
$\frac{2}{2}$  de 18



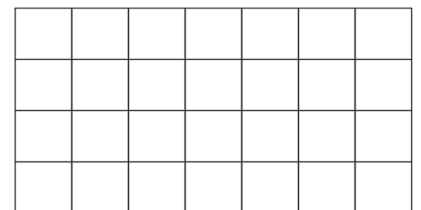
$\frac{1}{3}$  de 156



$\frac{3}{3}$  de 6



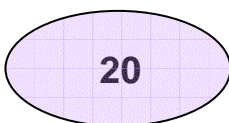
$\frac{8}{8}$  de 32



[www.fichas.es](http://www.fichas.es)

Une con flechas

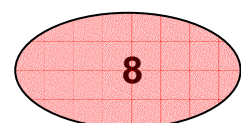
$\frac{2}{4}$  de 40



$\frac{8}{8}$  de 8



$\frac{4}{9}$  de 18








Nombre: \_\_\_\_\_

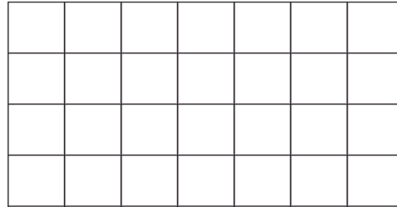
Fecha: \_\_\_\_\_

Dibuja la fracción en la cuadrícula y calcula.


Ejemplo

$\frac{3}{4}$ de 168

$168 \begin{array}{r}   4 \\ \hline 08 \quad 42 \\ 0 \end{array} \quad \begin{array}{r} 42 \\ \times 3 \\ \hline 126 \end{array}$

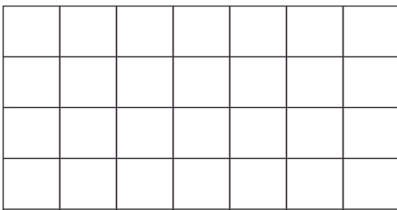
$$\frac{2}{2} \text{ de } 100$$



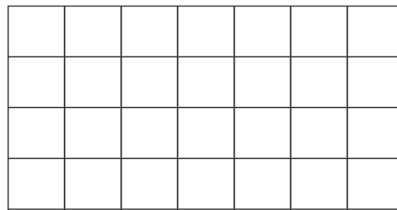
$$\frac{3}{3} \text{ de } 186$$



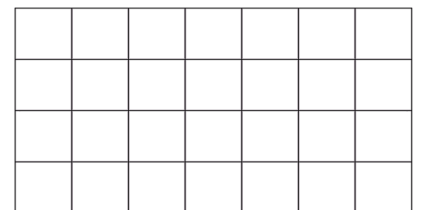
$$\frac{1}{2} \text{ de } 76$$



$$\frac{2}{6} \text{ de } 168$$



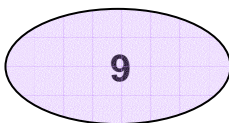
$$\frac{2}{4} \text{ de } 308$$



[www.fichas.es](http://www.fichas.es)

Une con flechas

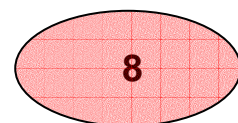
$$\frac{1}{2} \text{ de } 16$$



$$\frac{1}{4} \text{ de } 36$$



$$\frac{3}{7} \text{ de } 49$$



Nombre: \_\_\_\_\_


Fecha: \_\_\_\_\_

Dibuja la fracción en la cuadrícula y calcula.


Ejemplo

$\frac{3}{4}$ de	168
$\begin{array}{r} 168 \overline{) 4} \quad 42 \\ 08 \quad 42 \\ 0 \quad \quad \quad \underline{x3} \\ 126 \end{array}$	

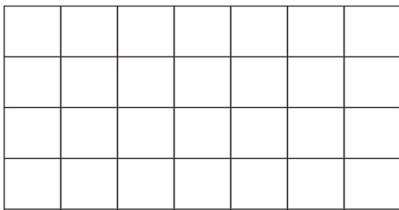
$$\frac{8}{9} \text{ de } 666$$



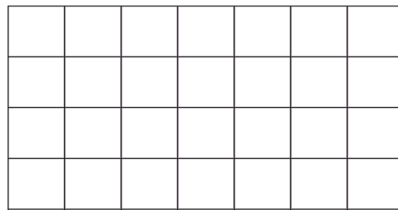
$$\frac{2}{3} \text{ de } 111$$



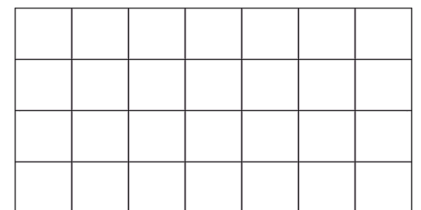
$$\frac{1}{1} \text{ de } 22$$



$$\frac{7}{8} \text{ de } 496$$



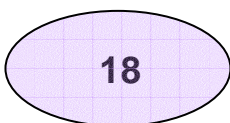
$$\frac{4}{6} \text{ de } 24$$



[www.fichas.es](http://www.fichas.es)

Une con flechas

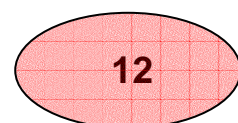
$$\frac{2}{3} \text{ de } 27$$



$$\frac{1}{1} \text{ de } 7$$



$$\frac{2}{6} \text{ de } 36$$



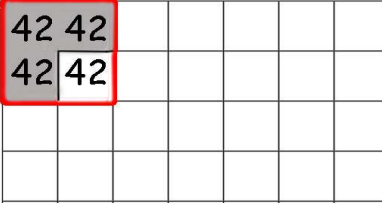


Nombre: \_\_\_\_\_


Fecha: \_\_\_\_\_

Dibuja la fracción en la cuadrícula y calcula.


Ejemplo

$\frac{3}{4}$ de	<b>168</b>
	
$\begin{array}{r} 168 \overline{) 4} \quad 42 \\ 08 \quad 42 \\ 0 \quad \quad \underline{x3} \\ 126 \end{array}$	

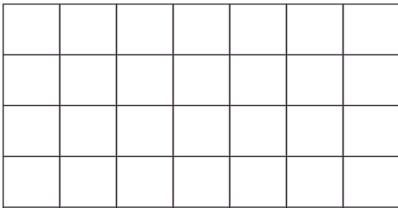
$$\frac{4}{4} \text{ de } 104$$



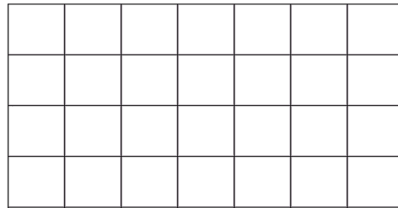
$$\frac{5}{6} \text{ de } 408$$



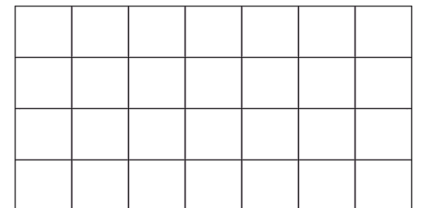
$$\frac{1}{2} \text{ de } 146$$



$$\frac{4}{8} \text{ de } 88$$



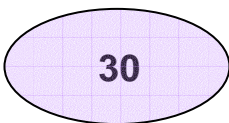
$$\frac{4}{9} \text{ de } 729$$



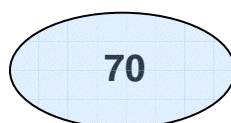
[www.fichas.es](http://www.fichas.es)

Une con flechas

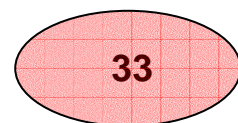
$$\frac{3}{3} \text{ de } 30$$



$$\frac{7}{9} \text{ de } 90$$



$$\frac{3}{4} \text{ de } 44$$



Nombre: \_\_\_\_\_


Fecha: \_\_\_\_\_

Dibuja la fracción en la cuadrícula y calcula.


Ejemplo

$\frac{3}{4}$ de	168
$\frac{3}{4}$	
42 42	
42 42	
168   4	42
08 42	x3
0	<u>126</u>


$$\frac{3}{7} \text{ de } 525$$




$$\frac{2}{4} \text{ de } 208$$




$$\frac{2}{5} \text{ de } 125$$



$$\frac{6}{7} \text{ de } 154$$



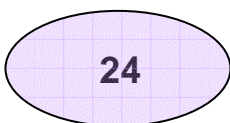
$$\frac{6}{7} \text{ de } 476$$



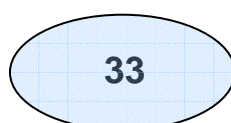
[www.fichas.es](http://www.fichas.es)

Une con flechas

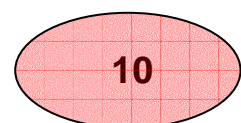
$$\frac{3}{4} \text{ de } 44$$



$$\frac{2}{9} \text{ de } 45$$



$$\frac{4}{6} \text{ de } 36$$



Nombre: \_\_\_\_\_


Fecha: \_\_\_\_\_

Dibuja la fracción en la cuadrícula y calcula.


Ejemplo

$\frac{3}{4}$	de	168	
42	42		
42	42		
168		4	42
08		42	x3
0			126

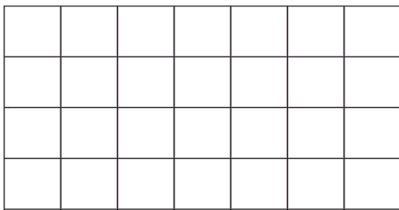
$$\frac{1}{2} \text{ de } 138$$



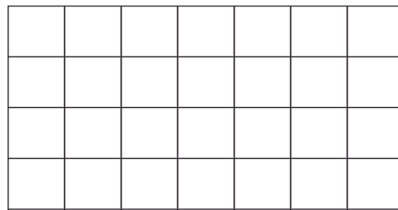
$$\frac{4}{8} \text{ de } 96$$



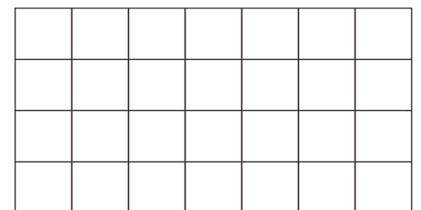
$$\frac{4}{5} \text{ de } 265$$



$$\frac{3}{5} \text{ de } 65$$



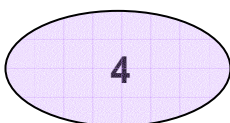
$$\frac{2}{5} \text{ de } 15$$



[www.fichas.es](http://www.fichas.es)

Une con flechas

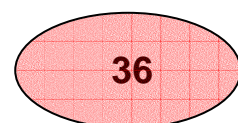
$$\frac{4}{6} \text{ de } 54$$



$$\frac{1}{3} \text{ de } 12$$



$$\frac{1}{3} \text{ de } 6$$




Dibuja la fracción en la cuadrícula y calcula.


Ejemplo

$\frac{3}{4}$ de		168	
42	42		
42	42		
168   4		42	
08 42		x3	
0		<u>126</u>	


$$\frac{5}{5} \text{ de } 280$$




$$\frac{3}{4} \text{ de } 160$$




$$\frac{5}{7} \text{ de } 98$$



$$\frac{4}{4} \text{ de } 288$$



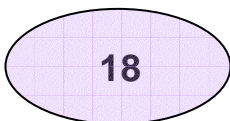
$$\frac{3}{4} \text{ de } 208$$



[www.fichas.es](http://www.fichas.es)

Une con flechas

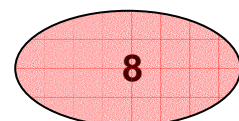
$$\frac{5}{6} \text{ de } 60$$



$$\frac{1}{1} \text{ de } 8$$



$$\frac{6}{6} \text{ de } 18$$



Nombre: \_\_\_\_\_

Fecha: \_\_\_\_\_

Dibuja la fracción en la cuadrícula y calcula.

Ejemplo

$\frac{3}{4}$ de	<b>168</b>
<b>42 42</b>	
<b>42 42</b>	

168		4		42
08		42		x3
0				<u>126</u>

$$\frac{2}{5} \text{ de } 290$$


$$\frac{3}{7} \text{ de } 266$$


$$\frac{5}{5} \text{ de } 80$$

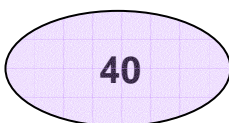

$$\frac{3}{7} \text{ de } 161$$


$$\frac{2}{4} \text{ de } 316$$


[www.fichas.es](http://www.fichas.es)

Une con flechas

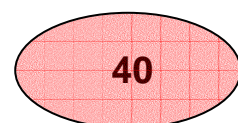
$$\frac{4}{7} \text{ de } 70$$



$$\frac{2}{8} \text{ de } 88$$



$$\frac{5}{8} \text{ de } 64$$





Nombre: \_\_\_\_\_

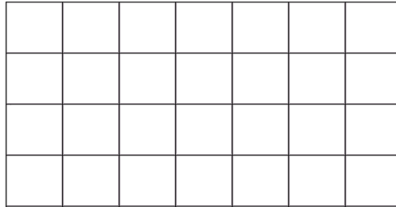
Fecha: \_\_\_\_\_

Dibuja la fracción en la cuadrícula y calcula.


Ejemplo

$\frac{3}{4}$	de	168	
42	42		
42	42		
168		4	42
08		42	x3
0			<u>126</u>

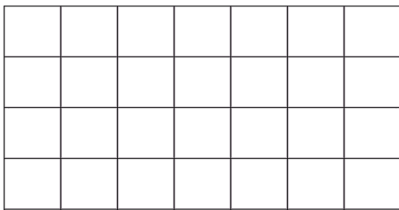
$$\frac{4}{5} \text{ de } 40$$



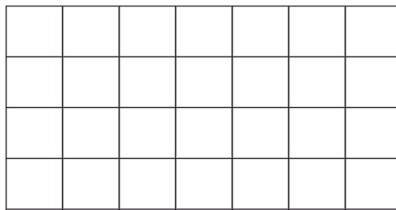
$$\frac{1}{4} \text{ de } 244$$



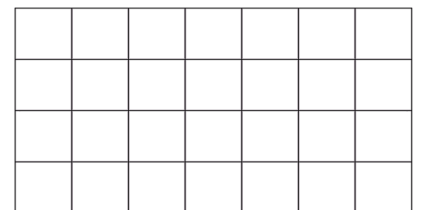
$$\frac{4}{7} \text{ de } 483$$



$$\frac{4}{6} \text{ de } 72$$



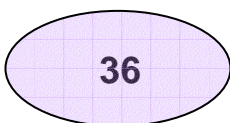
$$\frac{1}{1} \text{ de } 37$$



[www.fichas.es](http://www.fichas.es)

Une con flechas

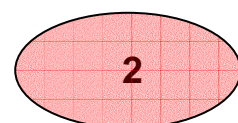
$$\frac{1}{1} \text{ de } 2$$



$$\frac{6}{7} \text{ de } 42$$



$$\frac{2}{3} \text{ de } 15$$



Nombre: \_\_\_\_\_

Fecha: \_\_\_\_\_

Dibuja la fracción en la cuadrícula y calcula.


Ejemplo

$\frac{3}{4}$  de 168


42	42				
42	42				

$$\begin{array}{r} 168 \overline{) 4} \quad 42 \\ 08 \quad 42 \\ 0 \quad \quad \quad \underline{x3} \\ 126 \end{array}$$

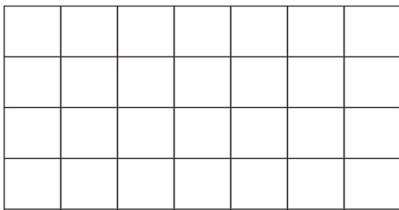
$\frac{3}{5}$  de 255



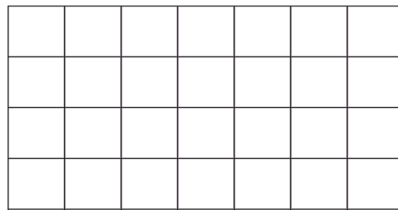
$\frac{6}{9}$  de 27



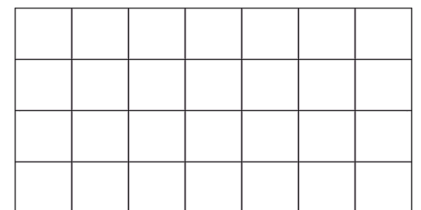
$\frac{5}{7}$  de 518



$\frac{3}{3}$  de 156



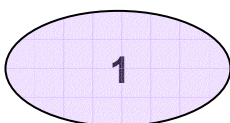
$\frac{4}{7}$  de 182



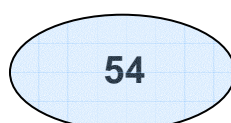
[www.fichas.es](http://www.fichas.es)

Une con flechas

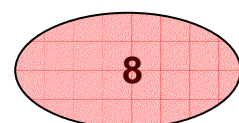
$\frac{4}{5}$  de 10



$\frac{1}{1}$  de 1



$\frac{6}{7}$  de 63

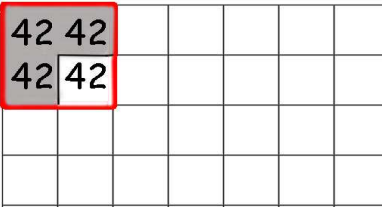


Nombre: \_\_\_\_\_


Fecha: \_\_\_\_\_

Dibuja la fracción en la cuadrícula y calcula.


Ejemplo

$\frac{3}{4}$ de	<b>168</b>
	
$168 \overline{) 4}$	<b>42</b>
$08 \quad 42$	<b>x3</b>
$0$	<b>126</b>

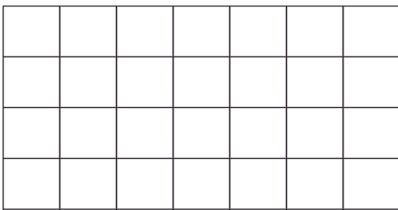
$$\frac{4}{6} \text{ de } 150$$



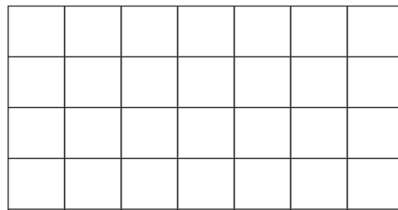
$$\frac{3}{8} \text{ de } 640$$



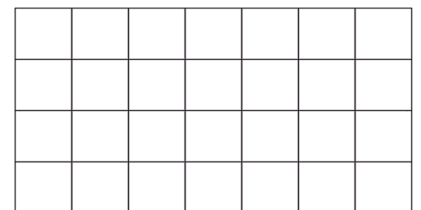
$$\frac{7}{8} \text{ de } 328$$



$$\frac{3}{4} \text{ de } 304$$



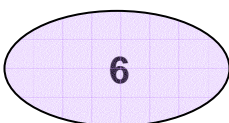
$$\frac{1}{2} \text{ de } 48$$



[www.fichas.es](http://www.fichas.es)

Une con flechas

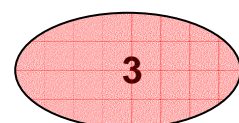
$$\frac{1}{6} \text{ de } 18$$



$$\frac{2}{2} \text{ de } 6$$



$$\frac{3}{6} \text{ de } 12$$



Nombre: \_\_\_\_\_


Fecha: \_\_\_\_\_

Dibuja la fracción en la cuadrícula y calcula.


Ejemplo

$\frac{3}{4}$	de	168	
42	42		
42	42		
168		4	42
08		42	x3
0			<u>126</u>

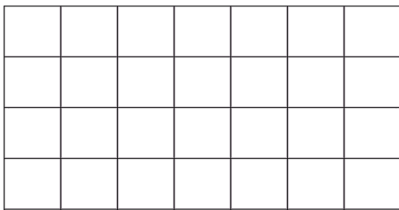
$$\frac{1}{3} \text{ de } 204$$



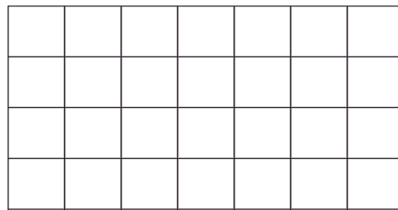
$$\frac{3}{4} \text{ de } 28$$



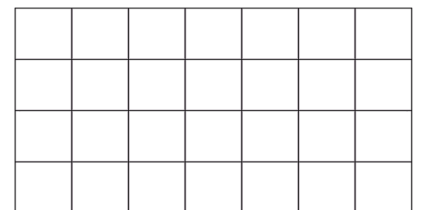
$$\frac{2}{7} \text{ de } 483$$



$$\frac{3}{6} \text{ de } 336$$



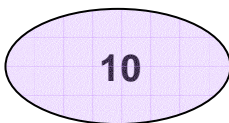
$$\frac{7}{7} \text{ de } 532$$




[www.fichas.es](http://www.fichas.es)

Une con flechas

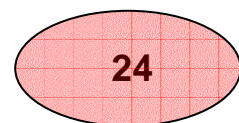
$$\frac{6}{8} \text{ de } 32$$



$$\frac{2}{5} \text{ de } 25$$



$$\frac{5}{7} \text{ de } 42$$

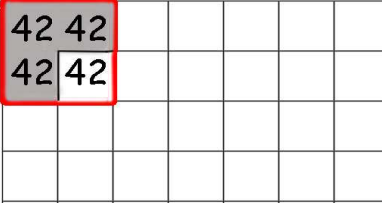


Nombre: \_\_\_\_\_


Fecha: \_\_\_\_\_

Dibuja la fracción en la cuadrícula y calcula.


Ejemplo

$\frac{3}{4}$ de 168

$168 \begin{array}{r}   4 \\ \hline 08 \quad 42 \\ 0 \end{array} \quad \begin{array}{r} 42 \\ \times 3 \\ \hline 126 \end{array}$


$$\frac{2}{3} \text{ de } 189$$




$$\frac{2}{2} \text{ de } 158$$




$$\frac{5}{7} \text{ de } 196$$



$$\frac{6}{8} \text{ de } 96$$



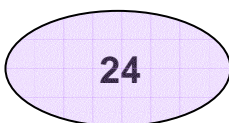
$$\frac{3}{4} \text{ de } 232$$



[www.fichas.es](http://www.fichas.es)

Une con flechas

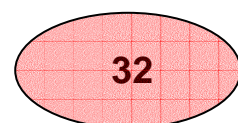
$$\frac{8}{9} \text{ de } 36$$



$$\frac{3}{5} \text{ de } 40$$



$$\frac{4}{6} \text{ de } 24$$



Nombre: \_\_\_\_\_

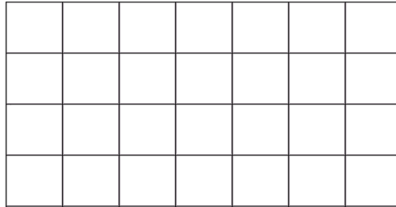
Fecha: \_\_\_\_\_

Dibuja la fracción en la cuadrícula y calcula.


Ejemplo

$\frac{3}{4}$	de	168	
42 42			
42 42			
168		4	42
08		42	x3
0			<u>126</u>

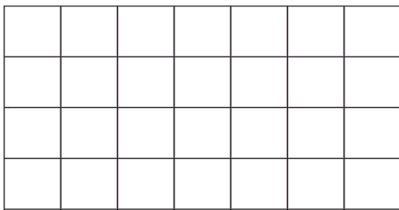
$$\frac{2}{5} \text{ de } 145$$



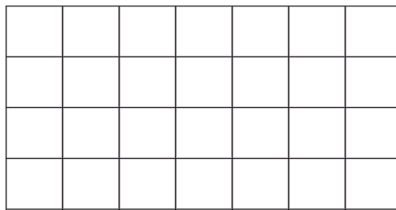
$$\frac{7}{9} \text{ de } 387$$



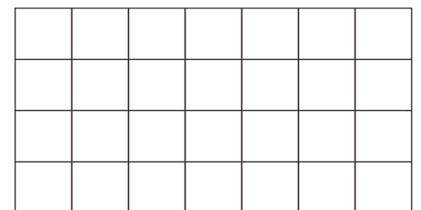
$$\frac{1}{8} \text{ de } 320$$



$$\frac{2}{2} \text{ de } 154$$



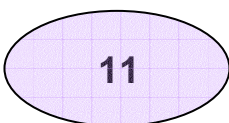
$$\frac{4}{8} \text{ de } 472$$



[www.fichas.es](http://www.fichas.es)

Une con flechas

$$\frac{1}{3} \text{ de } 33$$



$$\frac{2}{4} \text{ de } 36$$



$$\frac{4}{6} \text{ de } 12$$

